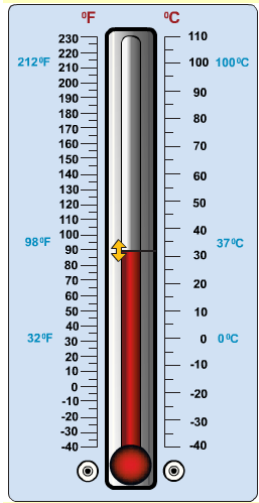
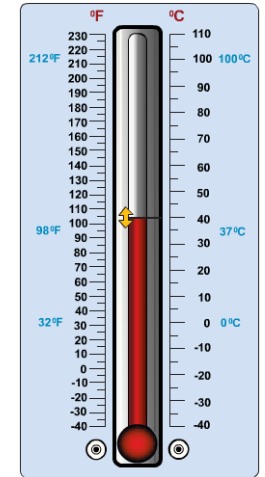


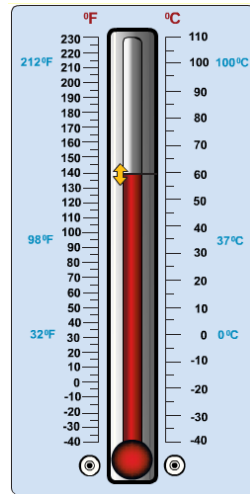
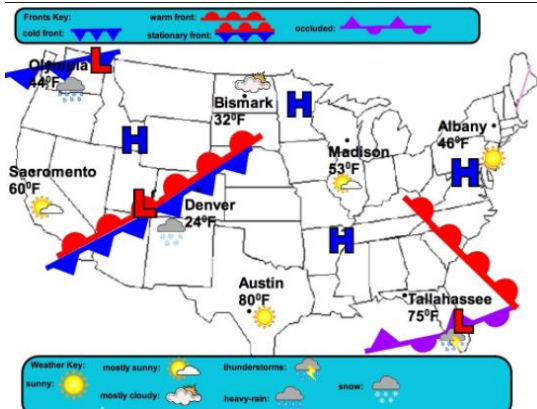
What city does the thermometer represent?



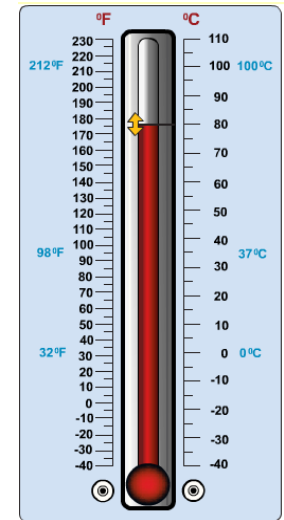
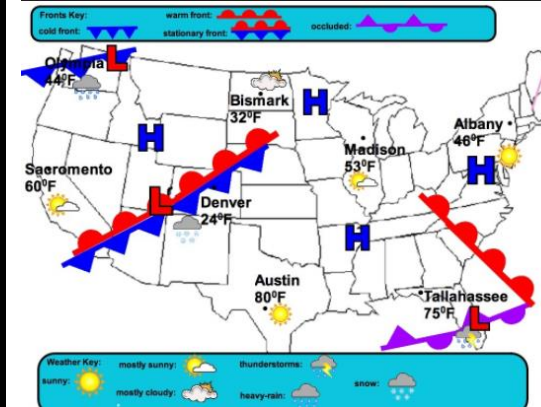
What city does the thermometer represent?



What city does the thermometer represent?



What city does the thermometer represent?




First, study the flash cards that have the weather symbol and the meaning. You can quiz the members of your group. Work together!

After you have mastered the list, you can play memory with the second set of cards that have the weather symbol and the meaning on separate cards.

Sunny



Partly cloudy



Cold temperatures



Windy



Rainy



Thunder storm



Cloudy



Snow



Place a weather symbol in the square below. Then find the appropriate clothing that you would predict a child would wear if they saw those symbols.

Place the clothing below that you think matches the weather symbol.



Place a weather symbol in the box. Then place the type of clothes that you would wear.

Weather
Symbol

Clothing



Record the weather information for Friday.

Temperature _____ Clear or Cloudy _____

Hot or Cold _____ Rainy or Cloudy _____



Record the weather information for Saturday.

Temperature _____ Clear or Cloudy _____

Hot or Cold _____ Rainy or Icy _____




Record the weather information for Friday.

Temperature _____ Clear or Cloudy _____

Hot or Cold _____ Calm or Windy _____



Did you know that the air is moving all around us? We call this moving air wind. The wind for this day is moving between 5 and 10 miles per hour.



38 58



CLOUDS &
SUN MIX

NE/SE 10

THU

Describe the weather for Thursday including the wind speed.

39 55



20%
ISOLATED
SHOWER

S 5-15

MON

Describe the weather for Thursday including the wind speed.



Describe how the wind speed changes from Saturday to Sunday.
